

SURE KEY EXAMINATIONS BOARD  
**PRIMARY LEAVING EXAMINATION**  
2020  
SOCIAL STUDIES WITH RELIGIOUS EDUCATION  
**FINAL BLUE PRINT**

**SECTION A**

1. **Mention one school symbol.**

- |                |                  |                 |
|----------------|------------------|-----------------|
| -School badge  | -School signpost | -School uniform |
| -School anthem | -School flag     | -School Motto   |

2. **State one duty of a class monitor.**

- |   |                              |
|---|------------------------------|
| -To collect books for marking.              | -To protect class properties |
| -To settle disputes among other classmates. | -To promote morals           |
| -To promote order in a class                | -To guide and counsel others |
| -To promote sanitation/cleanliness          |                              |

3. **Identify one way of controlling COVID 19.**

- |  |                                     |
|--|-------------------------------------|
| -Through wearing a face mask                                 | -Through eating nutritious food     |
| -Through observing social distancing                         | -Through sanitizing hands regularly |
| -Through washing hands with soap regularly                   | -Through avoiding mass gatherings   |
| -Through avoiding public means of transport                  | -Through vaccination                |
| -Through mass sensitisation on Covid 19                      | - Through enforcing lockdown        |
| -Through reporting suspected cases to the ministry of health |                                     |
| -Through isolating suspected Covid 19 patients and contacts. |                                     |
| -Through quarantining Covid 19 patients                      |                                     |

4. **State one role played by a CAO at a district level.**

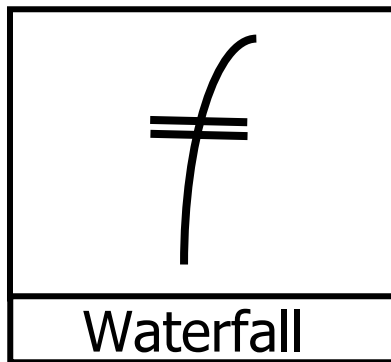
- |                                |                              |
|--------------------------------|------------------------------|
| -To account for district funds | -To supervise Civil servants |
| -To pay Civil servants         | -To conduct civil marriage   |

5. **How does a national language promote trade?**

- It makes communication easy
- It enables a buyer to bargain
- It promotes peace and security
- It promotes unity
- It promotes friendship

6. **Mention one reason for holding free and fair elections in a country like Uganda.**
  - To promote peaceful change of government
  - To promote respect for human rights
  - To promote constitutional rule
  - To promote democracy
  - To promote peace
  - To promote security
  
7. **Why did colonialists construct roads and railway lines in East Africa?**
  - To ease administration
  - To promote trade
  - To ease transportation of goods
  - To promote peace and security
  - To promote investment
  - To end slave trade
  - To promote/ develop Agriculture
  - To promote development
  - To link different places
  
8. **How are natural forests important to carpenters?**
  - They provide wood/timber for making furniture.
  
9. **State one way of controlling poverty in a country.**
  - Through discouraging laziness
  - Encouraging the growing of traditional cash crops
  - Through promoting peace and security
  - Through creating market for goods
  - Through promoting and modernizing agriculture
  - Through improving transport Network
  - Through giving loans to people
  - By starting up businesses
  - Through setting up projects
  - Through promoting industrialization
  
10. **Give one duty of the parliament of Uganda.**
  - To approve the national budget
  - To amend laws
  - To approve ministers and other officials appointed by the president
  - To make laws
  - To check government expenditure
  - To discuss national issues
  
11. **Mention one detail/information collected during national population census.**
  - Date of birth
  - Household items
  - Number of animals
  - Age
  - Marital status
  - Number of children
  - Sex
  - Education status
  - Occupation
  
12. **How can crop growing be done successfully in drier areas of Uganda?**
  - By irrigation/ watering
  
13. **State one cause of child abuse.**
  - Indiscipline among Children
  - Poverty
  - Ignorance among people
  - Lack of strict laws against child abuse
  - Death of parents
  - Unemployment
  - Civil wars/ Rebel activities
  - Alcoholism

14. **What does the symbol below represent on a map?**



15. **Give one problem faced by the government of Uganda when providing social services to its citizens.**

- Shortage of funds
- High population
- Shortage of skilled labour
- Corruption
- Hostile tribes/ poor response from people
- Ignorance among people
- Remoteness of some areas

16. **Give one way Corona Virus has affected people in Uganda.**

- It has led to school dropouts
- Has led to closure of some schools
- Has improved on science and technology
- It has increased poverty
- Has increased unwanted pregnancies
- Has increased domestic violence
- Has led to lockdown and curfew
- Has led to unemployment
- Has increased the number of orphans, widows and widowers.
- It has retarded trade activities
- Has led to death of people
- Has retarded tourism
- Has led to closure of airports, bars.
- Has increased on government expenditure

17. **State one reason for the formation of OAU in 1963.**

- To promote peace and security
- To promote unity
- To promote friendship and cooperation
- To promote solidarity
- To promote respect for human rights
- To preserve African culture
- To end colonialism
- To end apartheid and colour bar

18. **State the major duty of Uganda Police.**

- To enforce / keep law and order

19. **How is Blue Nile related to River Nile?**

- It is the major tributary of river Nile.
- Blue Nile is a tributary of River Nile.

20. **Identify one crop introduced by the Portuguese in East Africa.**

- Yellow maize/Maize
- Pawpaw/papaya
- Pineapple
- Sweet potato
- Cassava
- Guavas

21. **How did early man obtain food?**

- Through gathering wild fruit and honey
- Through hunting
- Through fishing
- Through farming

22. **State one way of promoting the tourism sector.**  
 -By building better hotels and lodges                      -By constructing better roads  
 -By advertising tourist attractions on international media  
 -By promoting peace and security  
 -By setting up more tourist centres/game parks/Game reserve.  
 -By protecting existing forests, game parks and game reserves  
 -By discouraging poaching                      -By protecting wildlife  
 -By discouraging encroachment in game parks and forests.
23. **Why did the government of Uganda introduce Universal Primary Education?**  
 -To reduce on illiteracy                      -To fight poverty                      -To create jobs  
 -To enable the poor to attain education                      -To promote development
24. **How does the government of Uganda ensure proper spending of her revenue it collects from her citizens?**  
 -By preparing a national budget
25. **Mention any one activity that the Bachwezi are remembered for in Uganda.**  
 -Growing coffee                      -Iron smelting/working                      -Pottery  
 -Bark cloth making                      -Salt mining  
 -Cattle keeping (Long horned cattle)
26. **Name one tribe that belongs to the River-Lake Nilotes.**  
 -Japadhola                      -Acholi                      -Jaluo  
 -Alur                      -Dinka
27. **Give one method used to control soil erosion in hilly areas of Uganda.**  
 -Terracing                      -Strip cropping                      -Contour ploughing  
 -Planting trees                      -Planting cover crops
28. **State one economic benefit of coral reefs.**  
 -Promote tourism                      -Used for making cement  
 -Used for making pumice stones for sale.
29. **State one reason why Arabica coffee does well on the slopes of mountain Elgon.**  
 -There is fertile volcanic soils  
 -There is enough rainfalls received/ favourable climate
30. **What is smuggling?**  
 -Is the illegal importation and exportation of goods

31. **Why is poaching a threat to tourism of Uganda?**
  - It reduces the number of animals in a game park
  - It leads to extinction of some animal species.
  - It leads to death of animals
  - It leads to displacement/ migration of animals
  - It reduces on the number of tourists
32. **Mention one country that remained free from colonialism in Africa.**
  - Ethiopia
  - Liberia
33. **How do children help to promote security at their homes?**
  - They report wrong doers
  - They report strangers
  - By advising parents to use security dogs and guards
  - By advising parents to fence homes
  - By following rules and regulations
  - By closing doors, window and gates.
  - By respecting family members
  - By avoiding unnecessary movements especially at night
  - By alarming when they detect danger
34. **State one factor that causes rural-urban migration in Uganda today.**
  - Unemployment
  - Poor health services
  - Poor education service
  - Poor transport and communication network
  - Poverty
  - Civil wars/rebel activities
  - Natural disasters (floods, landslides)
  - Misunderstandings/quarrels/conflicts
  - Family neglect
  - Job transfer
  - Shortage of market
35. **Give one reason why Lake Kyoga is said to be the most swampy lake in East Africa.**
  - It is highly silted
  - It is shallow
36. **Mention any one important place found in our community.**
  - Markets
  - Banks
  - Churches
  - Mosques
  - Schools
  - Hospitals
  - Police station/posts
  - Barracks
  - Supermarkets
37. **Identify one weather instrument kept in a Stevenson screen at a weather station.**
  - Barometer
  - Hygrometer
  - Six's thermometer
38. **Name the main physical feature which greatly influences the formation of relief rainfall.**
  - Mountain

39. **Name the body that was replaced by the African Union.**

  - OAU/Organization of African Unity
40. **Mention one problem faced by the builders of the Uganda railway.**

  - Shortage of food                                      -Attacks from hostile tribes (Nandi, Maasai)
  - Shortage of construction materials/equipment                                      -Shortage of water
  - Poor pay/ under payment                                      -Attacks from tropical diseases (jiggers)
  - Attack from dangerous wild animals/man-eaters (lions)
41. **What are economic activities?**

  - These are activities people do to earn a living/money.
42. **Name the global pandemic disease that has slowed down the development of the world.**

  - COVID-19/ Corona virus disease
43. **How is a time table important in a classroom?**

  - Promotes order in a classroom                                      -Shows the flow of activities in a class
  - Promotes time management                                      -Controls/ prevents collision
  - Helps us to know the next lesson/subject
  - Helps teachers to make enough preparations
44. **Give one reason why some people fail to get basic needs for themselves.**

  - Due to laziness                                      -Due to sickness                                      -Due to corruption
  - Due to pandemic diseases                                      -Due to Civil wars/conflicts
  - Due to ignorance                                      -Due to poverty                                      -Due to unemployment
  - Due to illiteracy                                      -Due to some religious beliefs                                      -Due to witchcraft
45. **How are commercial banks important to traders?**

  - They give loans to traders                                      -They keep traders money safely
  - They keep traders important documents (Wills, land title, academic documents)
  - Give financial advice to traders
46. **What role is played by the parliament in the budget making process?**

  - It approves the budget (national budget)
47. **Name the type of roads that are commonly constructed in hilly and mountainous areas.**

  - Winding roads

48. **Name the road sign shown below.**



49. **Give one activity done by farmers during wet seasons.**

- Planting/planting crops
- Weeding
- Collecting water for irrigation
- Thinning

50. **Name one river that pours its water to Lake Victoria.**

- River Kagera
- River Katonga
- River Nzoia
- River Yala
- River Mara
- River Nyando
- River Bukora

51. **Give one example of a primary industry.**

- Fishing
- Mining
- Agriculture/farming
- Lumbering

52. **Mention way the government of Uganda has tried to control the spread of Corona Virus which is a global threat today.**

- By advising people to wear face masks
- By encouraging scientific weddings
- By organising scientific campaigns/elections
- By enforcing curfew.
- By discouraging mass gatherings
- By closing open/public/community markets
- By importing COVID 19 vaccines
- By advising people to be vaccinated
- By encouraging scientific burial
- By discouraging mass wedding
- By advising people to observe social distancing
- By enforcing lockdown
- By advising people to sanitize frequently
- By Closing schools
- By advising people to wash hands frequently with soap
- By Closing churches
- By advising people to eat nutritious food
- By Closing airports
- By advising people to engage in physical exercises
- By publishing and displaying poster on preventive measures of covid 19
- By advising people to report COVID 19 related cases.
- By discouraging use of public means of transport
- By Closing bars and night clubs

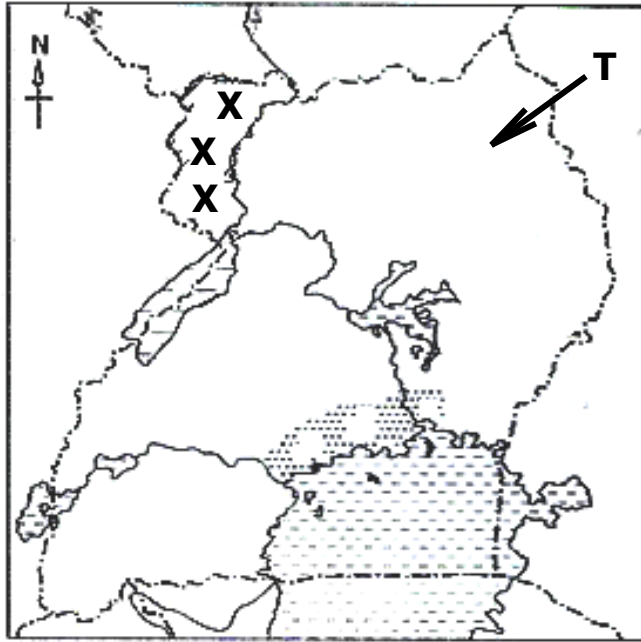
53. **What lastly led to the collapse of BunyoroKitaraempire?**

- Coming of the Lou speakers/ Luo invasion

54. **State the title given to the political head of a Municipality.**  
-Mayor
55. **Why was James Grant sent together with John Speke to Uganda?**  
-To prove whether Lake Victoria was the source of river Nile
56. **Give one reason why school children should be given holidays at the end of the term.**  
 -To relax their minds  
 -To visit their relatives and friends  
 -To learn domestic chores/work  
 -To learn their culture  
 -To make personal research  
 -To interact with their parents
57. **How does a good transport network help to promote tourism in Uganda?**  
 -It eases the transportation of tourists.  
 -It eases the provision of services to tourists  
 -It motivates and encourages the coming of tourists  
 -It promotes peace and security
58. **Name the type of tax paid on imported goods.**  
-Import tax/Custom duty
59. **How does improved medical services lead to population growth?**  
 -It reduces on infant mortality rate  
 -It promotes safe and healthy birth delivery of babies  
 -People get better health services which reduces on the death rates
60. **State one negative effect of too much rainfall in our community.**  
 -Causes floods  
 -Causes soil erosion  
 -Delays people's activities  
 -Destroys people's property/crops  
 -Causes landslides  
 -Destroys bridges  
 -Blocks transport  
 -Leads to death of people
61. **Mention one problem faced by Uganda Wildlife Authority as it does its duties.**  
 -Shortage of funds  
 -Shortage of skilled workers  
 -Outbreak of animals diseases  
 -Encroachment  
 -Attacks from dangerous wild animals  
 -Corruption  
 -Poor government policies  
 -Outbreak of wild fire  
 -Poaching
62. **Name the military wing that is responsible for ensuring peace and security in ECOWAS member states.**  
-ECOMOG/Economic Community of West African States Monitoring Group



Study the map of Uganda below and use it to answer questions 62 and 63



63. **Name the type of coffee grown in region marked xxxx.**

-Robusta coffee

64. **Mention one tribe that belongs to the Ethnic group that used the route labeled T.**

-Karimojong/Karamojong

-Langi

-Iteso

-Kumam

65. **Why are perishable goods exported to outside countries by air transport means?**

-Air transport means are very fast/quick

-Air transport means save time

66. **How did the construction of the Uganda railway help to control slave trade?**

-Trains started carrying goods which were carried by slaves

-It eased the movement of soldiers who patrolled the area.

67. **State one factor that led to the rise and expansion of Buganda kingdom.**

-Presence of Lake Victoria

-Presence of fertile soil

-Presence of enough rainfall

-Presence of guns

-Presence of able/strong leaders

-Unity among people

-Participation in trade activities

68. **Give one political event that happened in Uganda on 9<sup>th</sup> October 1962.**

-Uganda gained her independence

-Independence celebrations

-The Union Jack (British flag) was lowered

-The Uganda flag was raised

-The Uganda national anthem was sung for the first time

-Duke of Kent handed over the powers of instruments to Dr Apollo Milton Obote

69. **Why did traders move in caravans during Trans-Saharan trade?**  
 -For protection against dangerous wild animals  
 -To increase economies of scale  
 -To carry a lot of goods  
 -For protection against enemies( hostile tribes)
70. **Name the organization that unites together Britain with her former colonies and protectorates.**  
 -The Commonwealth /The Commonwealth Organisation  
 -The Commonwealth of Nations(CWN)
71. **Which country shares a border with Tanzania to the south?**  
 -Mozambique
72. **Why is a rain gauge not kept in a Stevenson's Screen?**  
 -It is not a delicate weather instrument  
 -A rain gauge can't collect and measure rainfall received when put in a stevenson screen.
73. **How did the British promote cash crop growing in Uganda?**  
 -Introduced new cash crops  
 -They built roads and railway lines  
 -They gave New Cash crops to local chiefs who supplied them to the natives.  
 -They provided market to cash crops  
 -They set up Agro based industries.  
 -They taught people better farming methods
74. **How can one become a member of the East African Legislative Assembly?**  
 -After being elected from the parliament of one of the member countries of the East African Community.  
 -Through elections.
75. **Give any one way parents can promote proper health for children.**  
 -Taking them for vaccination/ immunisation  
 -By feeding them on nutritious food/balanced diet  
 -By encouraging them to wash hands using soap frequently  
 -By buying face masks for their children -By advising them to sanitize frequently  
 -By allowing them to engage in physical exercises  
 -By taking them to health centres or hospital when they fall sick.
76. **State any one condition that can lead to holding of aby-election.**  
 -Death of the post holder (incumbent)  
 -Resignation of the post holder  
 -Exilement of the post holder/political leader  
 -Election malpractices  
 -Retirement of the post holder  
 -Insanity of the post holder (mental illness)  
 -Vote of no confidence  
 -Lack of academic qualifications

77. **Give any one way the government gets information from people.**

- Through its spy network ie ISO,ESO, GISO, RDC, POLICE,
- Through social media
- Through passports
- Through its administrators
- Through Uganda National Examination Board [UNEB]
- Through telecommunication companies
- Through Geo polls/surveys
- Through cultural leaders
- Through community policing
- Through population census
- Through population census data.
- Through national identification cards
- Through birth and death certificates
- Through Mass media
- Through local leaders
- Through religious leaders

78. **How does Lake Victoria promote the growth of industries in East Africa?**

- Provides water for mixing chemicals
- Provides water for cooling machines
- Promote fishing which is a source of raw material to fish processing industries

79. **Why do most families in Uganda have deficit budgets?**

- They lack jobs/unemployment
- They are poor/poverty
- Due to increased loans and debts
- Due to poor government policies
- Due to big family size
- Due to sickness
- Due to lack of financial advice
- Due to corruption

80. **Draw a road sign to show a school ahead.**



81. **State any one importance of belonging to a family.**

- Promotes love
- Promotes morals
- It promotes culture
- There is enough parental care
- It promotes unity
- It promotes friendship
- It promotes peace and security
- It promotes identity
- One learns the family members
- It is a source of basic needs

82. **Give any one way countries benefit from minerals.**

- They get raw materials for some industries
- They create employment
- They are sources of income
- They are sources of government revenue
- They promote industrialization
- They lead to development of infrastructures

- 12

93. **Why do people living in hot areas wear light clothes?**  
 -To manage hot weather  
 -To reduce on heat in the body
94. **Name the perennial crop which is commonly grown in a swamp.**  
 -Sugarcane
95. **What time is it in Nairobi-Kenya if it is 8:00 p.m. in Kampala –Uganda?**  
 -8:00 p.m.
96. **Give any one role of leaders in promoting peace.**  
 -They guide and counsel people                      -They preach/promote reconciliation  
 -They discourage violent acts                      -They discourage antisocial behavior  
 -They settle disputes /conflicts/misunderstandings among people  
 -They promote social activities
97. **Why did the early missionaries in East Africa teach people practical skills?**  
 -To start self projects  
 -To create employment              -To fight poverty              -To increase sources of income  
 -To improve people's living standards              -To reduce dependency
98. **Give any one way the government of Uganda has tried to fight poverty among people.**  
 -Through giving grants              -Through creating market for goods  
 -Through promoting vocational training institutions  
 -Through promoting peace and security              -Through operation wealth creation  
 -Through promoting UPE,USE,ABEK ,COPE              -Teaching good farming methods  
 -Through provision of free vaccination/ immunisation service to Children.  
 -Reducing interest on loans given to people              -Promoting industrialization  
 -Through advising people to form SACCOs              -Through rural electrification  
 -Through advising people to work hard.              -Through construction of better roads  
 -Through reducing taxes imposed on traders and farmers  
 -Through Teaching people the importance of saving money.
99. **Mention any one proper way of managing plastic waste materials.**  
 -Through recycling plastic materials              -Reusing plastic materials  
 -Through disposing them into rubbish pits  
 -Through disposing them into trash cans/dustbins  
 -Reducing the production of plastic wastes  
 -Returning them to manufacturers  
 -Rejecting the production of plastic materials

100. **Give any one reason why plantation farming is expensive.**  
 -It requires a large piece of land  
 -It requires many workers  
 -It requires skilled labour  
 -It requires the use of machines
101. **How does the rift valley affect the development of transport?**  
 -It hinders the construction of transport Networks
102. **State the main source of revenue for the government of Uganda.**  
 -Taxes/taxation  
 -Loans  
 -Tourism  
 -Grants  
 -Imports and Exports  
 -Donations.
103. **How did Tanzania become a member of Common Wealth?**  
 -Through her colonial ties with Britain  
 -Through gaining independence from Britain
104. **Which climate in East Africa is hot and wet throughout the year?**  
 -Equatorial climate
105. **Mention any one material early man used to make fire.**  
 -Dry wood  
 -Stones

## RELIGIOUS EDUCATION.

106. **EITHER: Why did God create Adam?**  
 -To look after other creatures                      -To procreate                      -To till land  
 -To worship Him
- OR: Why did Allah create Adam?**  
 -To look after other creatures                      -To procreate                      -To till land  
 -To worship Him
107. **EITHER: State one way Christians show respect to God during prayers.**  
 -They close their eyes                      -They kneel down                      -They stand still  
 -They humble themselves                      -They close their doors
- OR: State one way Muslims show respect to Allah during Salat.**  
 -They remove their shoes                      -They kneel down  
 -They humble themselves                      -They dress decently.
108. **EITHER: Mention one type of prayer in Christianity.**  
 -Petition prayer                      -Intercession prayer                      -Meditation prayer  
 -Praising prayer                      -Thanksgiving prayer
- OR: Mention one type of prayer said daily in Islam.**  
 -Salat al-fajr/Subuhi                      -Salat al-Zuhr                      ISalat al-Asr  
 -Salat al-Maghrib                      -Salat al-Isha

109. **EITHER: Name symbol used in Christianity.**  
 -Cross                      -Bible                      -Rosary  
**OR: Name one symbol used in Islam.**  
 -Crescent/Moon      -Star                      -Tasbih/Tasbihat      -Prayer mat      -Qura'n.
110. **EITHER: Why did God send Moses to Egypt?**  
 -To rescue the Israelites from slavery  
**OR: Why did Allah send Musa to Egypt?**  
 -To rescue the Banu-Israelites from slavery.
111. **EITHER: Of what value is Lent to a Christian?**  
 -Brings a Christian closer to God                      -Helps a Christian to repent  
 -Helps a Christian to read the Bible                      -Helps a Christian to unite with others  
 -Helps a Christian to get blessings                      -Helps a Christian to avoid sins  
**OR: Of what value is Ramadhan to a Muslim?**  
 -Brings a Muslim closer to Allah                      -A Muslim learns Allah's ways  
 -A Muslim is forgiven his sins                      -A Muslim gets blessings from Allah  
 -A Muslim avoids sins                      -Helps a Muslim to concentrate on the Qur'an  
 -Strengthens faith.                      -A Muslim gets rewards from Allah.
112. **EITHER: Mention one miracle Jesus performed.**  
 -He cursed the fig tree and it dried                      -He turned water into wine  
 -He walked on water                      -He calmed the storm  
 -He healed Malchus' ear                      -He raised Lazarus from the dead  
 -He healed the bleeding woman                      -He healed the blind man  
**OR: Mention one miracle that Prophet Muhammad performed.**  
 -The revelation of the Qur'an                      -He used to speak to the dead  
 -Splitting the moon                      -He caused two trees to move  
 -He caused a well to swell with water                      -Isra and Miraj  
 -He made stones and trees to greet Him  
 -He milked a sick camel to feed many people.  
 -He made animals to communicate with Him  
 -He healed Ali's eye during the battle at Khaybar  
 -He made his enemies blind with a handful of dust  
 -He looked at Suraq and his horse sank into the earth.  
 -He used to feed people with supernatural water and food.
113. **EITHER: According to the Bible, who was the first martyr?**  
 -Saint Stephen  
**OR: According to Islam, who was the first martyr?**  
 -Sumayyah

114. **EITHER: Give one item Christians give as an offertory.**  
 -Animals                      -Construction materials                      -Rosaries                      -Bibles  
 -Birds                      -Money                      -Flowers                      -Fruits                      -Church wine  
 -Candles                      -Clothes                      -Food crops
- OR: Give one item Muslims give to Allah for His grace to them.**  
 -Money                      -Mats                      -Construction materials for the Mosque  
 -Food crops                      -Clothes for the needy                      -Animals                      -Qur'an                      -Birds
115. **EITHER: Why is the sacrament of baptism important in Christianity?**  
 -It washes the original sin                      -It initiates one to God's family
- OR: Why is circumcision an important aspect in Islam?**  
 -It is a sign of belonging to a Muslim community.  
 -It confirms ones relationship with Allah                      -For cleanliness/purity
116. **EITHER: Why did God create man in His own image and likeness?**  
 -To worship Him
- OR: Why did Allah create man in His own image?**  
 -To worship Him
117. **FOR BOTH: Name any one form of suffering.**  
 -Physical suffering                      -Mental/ psychological suffering                      -Emotional suffering
118. **EITHER: How do Christians use their mouth to serve God?**  
 -By preaching the gospel                      -By singing gospel/hymns                      -By praying for others  
 -By blessings others                      -By reading Bible in the church
- OR: How do Muslims use their mouth to serve Allah?**  
 -By reading the Qur'an                      -By preaching Islam                      -By praising Allah  
 -By blessings others                      -By praying for others
119. **EITHER: Who was the father of Isaac according to the Bible?**  
 -Abraham
- OR: Who was the father of Ishaq according to Islam?**  
 -Prophet Ibrahim
120. **EITHER: Give any one way Christians walk in the righteousness of God.**  
 -By fasting                      -By praying                      -By preaching the gospel  
 -By singing gospel songs.                      -By reading the Bible                      -By guiding Others  
 -By making pilgrimage to Holy places                      -By counselling others  
 -By attending church services                      -By paying offertories  
 -By paying tithe                      -By repenting                      -By forgiving Others

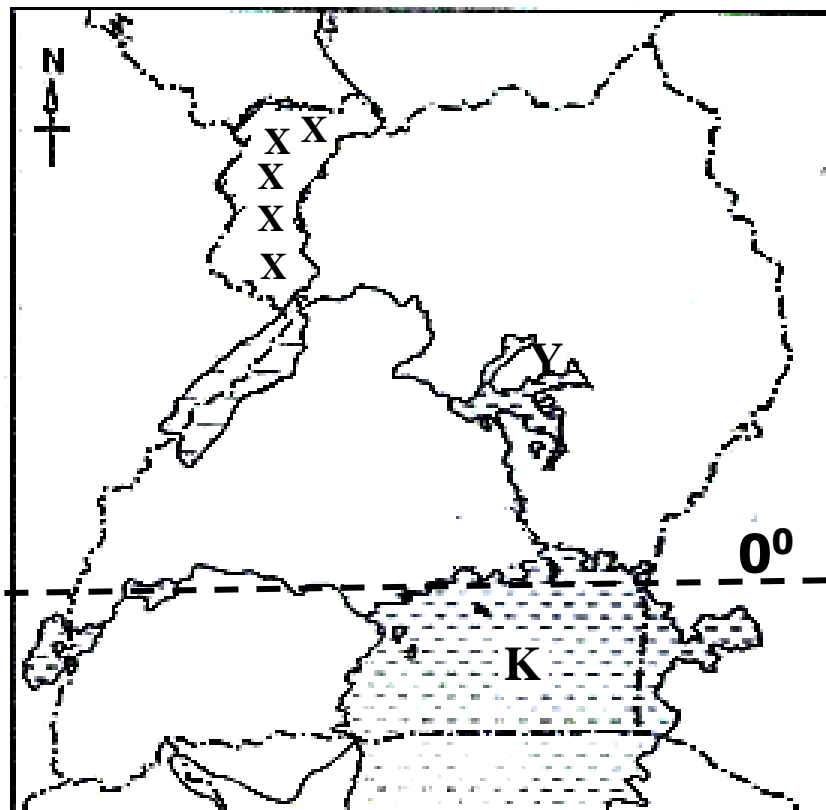


**OR: State any way Muslims walk in the righteousness of Allah.**

- By forgiving Others
- By repenting
- By reading the Qur'an
- By preaching Islam
- By fasting during Ramadan
- By praying five times a day
- By paying zakat
- By guiding Others
- By counselling Others
- By making pilgrimage to Mecca

### **SECTION B**

Study the map of Uganda below and answer the questions that follow.



121. (a) **Draw the Equator (0°) on the above map.**  
-Consider Lake George and Lake Victoria
- (b) **Identify the chief cash crop grown in area xxx.**  
-Tobacco
- (c) **How was lake marked Y formed?**  
-By down warping.
- (d) **Mention one island district found in lake marked K.**  
-Buvuma                                      -Kalangala
122. (a) **Name the British governor who introduced LEGCO in Uganda in 1921.**  
-Sir Robert Thorne Coryndon
- (b) **State two reasons why the British introduced LEGCO in Uganda in 1921.**  
-To make colonial laws                                      -To amend colonial laws  
-To advise colonial government                                      -To plan for development

**(c) Why were Ugandans not happy with the formation of LEGCO.**

- They were not represented
- They wanted their independence

123. **(a) What is a financial year?**

- This is a period of twelve months over which the government revenue is calculated.

**(b) Give two parts of a budget.**

- Income
- Expenditure

**(c) Mention way the government of Uganda can fight and reduce a deficit budget.**

- By increasing taxes
- By fighting smuggling
- By fighting corruption
- By modernising agriculture
- By teaching people the importance of taxes
- By reducing on salaries of government workers
- By allowing more investors
- By promoting industrialization
- By creating market for agricultural produce

124. **(a) What are children's rights?**

- These are natural freedoms entitled to all Children.
- Freedoms children should enjoy.

**(b) Give two roles of children at home.**

- Fetching water
- Collecting firewood
- Cooking food
- Washing utensils
- Mopping the house
- Washing clothes
- Ironing clothes
- Greeting /respecting elders
- Caring for babies

**(c) How are children able to detect that their rights have been abused?**

- By denying them food
- By denying them medical care
- By denying them parental love and care
- By isolating them
- Through kidnapping them
- Forcing them to marry
- Raping them
- Through defilement
- Through denying them education

125. **(a) What is meant by the term equinox?**

- This is the period when the sun overheads the equator.

**(b) Name the two months when the equinox occurs.**

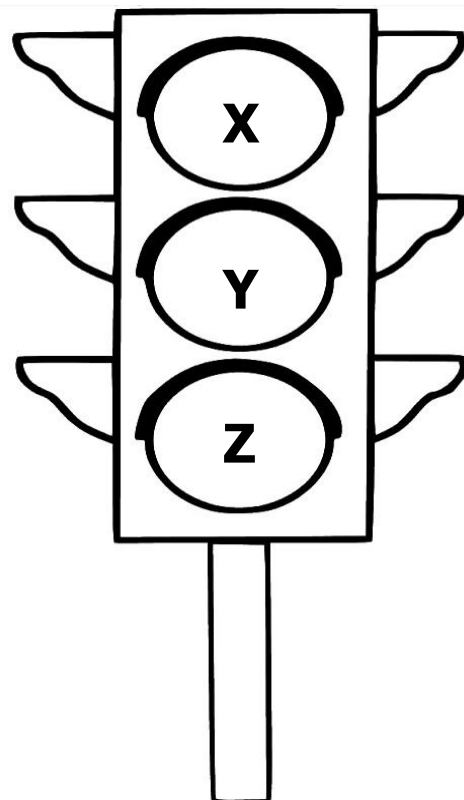
- March
- September

**(c) Which earth movement causes day and night?**

- Rotation of the earth

126. (a) **Give any two benefits of a high population to a country.**  
 -High tax collections                      -Cheap labour                      -Ready market for goods  
 -Enough security
- (b) **How does a high population affect land?**  
 -Leads to land fragmentation
- (c) **Give one reason why the population of Uganda should be controlled?**  
 -To reduce pressure on resources.                      -To ease planning by the gov't.  
 -To ease on provision of social service.
127. (a) **What name is given to the estimate of income and expenditure?**  
 -Budget
- (b) **Name any two types of estimated income and expenditure.**  
 -Balanced budget/ equilibrium budget  
 -Deficit budget/loss budget  
 -Surplus budget/profit budget
- (c) **What causes over spending?**  
 -Lack of a budget                      -Illegal possession of money                      -Excitement  
 -Ignorance on budgeting                      -Lack of financial advice                      -Bad peers  
 -Lack of responsibilities                      -Antisocial behaviour /Alcoholism                      -Boasting

**Study the diagram below and use it to answer the questions that follow.**



128. (a) **Identify the traffic lights X, Y, Z.**  
**X** -Red which means to Stop  
**Y** -Yellow which means to Wait or to Get Ready.  
**Z** -Green which means to Go.

**(b) Give one cause of road accidents.**

- Overloading vehicles
- Speeding of vehicles
- Lack of road signs
- Deployment of corrupt traffic officials
- Poor roads
- Driving vehicles under poor mechanical conditions
- Lack of road safety
- Driving while drunk.
- Poor interpretation of road signs

129. **(a) State one role played by each of the following people in the election process.**

**(i) Presiding officer.**

- He /she controls or manages the electoral process at a polling station.
- Announces election results at a polling station.

**(ii) Polling Assistant.**

- He / she helps a presiding officer at a polling station.

**(iii) Electorates.**

- They participate in voting/ they vote for their leaders

**(b) Outline one problem faced by the Electoral Commission while carrying out its duties.**

- Shortage of funds
- Corruption
- Delay of Electoral materials
- Poor transport
- Election petitions/Dissatisfaction from candidates
- Poor communication
- Poor government policies
- Shortage of skilled labour
- Ignorance among people
- Election malpractices/rigging elections
- Weather changes
- Poor response from voters
- Destruction of Electoral equipment/ materials

130. **(a) What are pandemic diseases?**

These are diseases that spread over the whole country or the whole world.

**(b) Give one reason Corona Virus / COVID 19 is regarded as a pandemic disease.**

- It spread over the whole world.

**(c) Identify one sector in Uganda that has been greatly affected by COVID 19.**

- Education
- Games and sports
- Hotels and restaurants
- Transport
- Tourism
- Entertainment industry

**(d) Mention any one measure the government of Uganda has put in place to curb / control COVID 19.**

- By advising people to wear face masks
- By enforcing curfew
- By organising scientific campaigns/elections
- By encouraging scientific weddings
- By importing COVID 19 vaccines
- By discouraging mass gatherings
- By encouraging scientific burial
- By closing open/public/community markets

- By advising people to be vaccinated
- By advising people to observe social distancing
- By advising people to sanitize frequently
- By advising people to wash hands frequently with soap
- By advising people to eat nutritious food
- By advising people to engage in physical exercises
- By publishing and displaying poster on preventive measures of covid 19
- By advising people to report COVID 19 related cases.
- By discouraging use of public means of transport
- By discouraging mass wedding
- By closing schools
- By closing bars and night clubs
- By composing lockdown
- By closing churches
- By closing airports

131. **(a) Name any three economic activities that provide raw materials to industries.**

- Fishing
- Mining
- Lumbering
- Farming/agriculture

**(b) Name one economic activity that can be carried out in desert areas.**

- Tourism
- Irrigation farming
- Transport
- Trade
- Mining
- Rearing camels

132. **(a) Name any two common markets where Uganda is a member.**

- East African Community/EAC
- Common Market for Eastern and Southern Africa/COMESA
- Inter-Governmental Authority on Development/IGAD

**(b) Give one way Uganda benefits from being a member of Different common markets.**

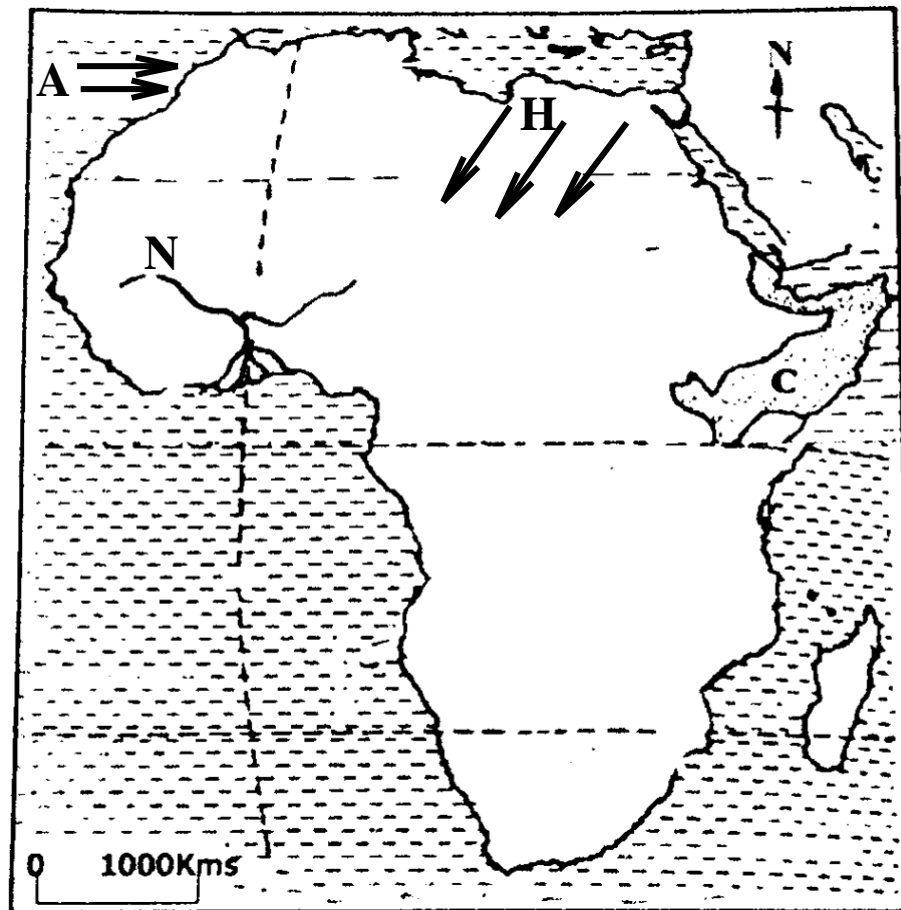
- Ugandans access goods they can't produce
- Uganda is linked to different parts of the world.
- Ugandans enjoy International Trade
- Ugandans access free movement of goods
- Ugandans get a wider market for their goods
- Ugandans get jobs
- Ugandans enjoy peace and security
- Ugandans enjoy International friendship
- Ugandans access sponsorships
- Ugandans improve their science and technology

**(c) State any one problem affecting common markets.**

- Production of similar goods
- Poor communication network
- Shortage of funds
- Poverty
- Poor transport Network
- Civil wars
- Political differences
- Corruption

133. (a) **Name the main crop which is grown on Kilombero Irrigation Scheme in Tanzania.**  
-Sugarcane
- (b) **State any two benefits of Kilombero Irrigation Scheme to people of Tanzania.**
- Creates employment                      -Source of raw materials to sugar factory
  - Has led to development of infrastructures                      -Source of income
  - Source of government revenue                      -Promotes education and research
  - Promotes tourism
- (c) **Mention any one way crop growing can be promoted in Tanzania.**
- Through mechanisation of agriculture
  - Through additional of fertilizer/manure                      -By using irrigation
  - Using modern farming methods                      -Promoting agro based industries
  - Providing ready market for agricultural produce
  - Reducing taxes on agricultural equipment
  - Spraying to kill pests and crop diseases
134. (a) **What is vegetation distribution?**
- This is the variation in vegetation of an area.
  - This is how plant life/ vegetation is spread in an area
- (b) **State two factors that affects vegetation distribution.**
- Altitude                      -Climate/rainfall                      -Latitude
  - Temperature                      -Human activities                      -Water bodies
  - Nature of the soil
- (c) **Name the government body that protects the environment.**  
-National Environment Management Authority/NEMA
135. (a) **Give any two natural resources of Uganda.**
- Plants/forests/vegetation                      -People                      -Land
  - Animals                      -Minerals                      -Air                      -Sunshine
  - Rainfall/water/water body
- (b) **Give two reasons why natural resources of Uganda have not been fully exploited.**
- Due to low technology                      -Shortage of market                      -Corruption
  - Poor government policies                      -Poor transport Network
  - Remoteness of some areas                      -Shortage of capital
  - Shortage of skilled labour

Study the map of Africa below and use it to answer the questions that follow.



136. (a) **Name River marked N**  
 -River Niger
- (b) **State the effect of the following prevailing winds marked A and H on the climate of Africa.**  
 (i) **A** Brings rain  
 (ii) **H** Doesn't bring rain
- (c) **Mention one country found in region C.**  
 -Somalia      -Ethiopia      -Eritrea      -Djibouti
137. (a) **What do you understand by the term government?**  
 -Is a group of people responsible for controlling a country.  
 -Is a group of people given executive powers to rule and govern a Country.
- (b) **State two arms of a democratic government.**  
 -Legislature/parliament      -Judiciary      -Executive
- (a) **Why should a democratic country like Uganda have a constitution?**
- To promote democracy      -To promote peace      -To promote security
  - To promote peaceful change of government
  - To promote respect for human rights      -To promote law and order
  - To promote competitive politics      -To guide political leaders
  - To state the powers of each organ of government

138. (a) **Name any one military leader of the Mau-Mau rebellion in Kenya.**

- General China/ Waruhiu Itote -Field Marshal Dedan kimathi
- Field Marshal Musa Mwariama -General Baimungi
- Field Marshal Muthoni Kirima -Stanley Mathenge

(b) **State two ways Mau-Mau benefited the people of Kenya.**

- It enabled Kenyans to get independence -It increased patriotism
- It led to abolition of Kipande system -It increased nationalism
- It led to abolition of forced cheap labour -It promoted Unity
- Kenyans were able to regain their land
- Africans started growing their Cash crops
- It led to reduction of racial segregation
- It led to preservation of African culture
- Kenyans started enjoying their rights
- It increased a sense of belonging
- It promoted friendship and cooperation

(c) **Why was the Mau-Mau rebellion popular in Kenya?**

- It demanded/fought for kenya's independence/freedom
- It fought against human rights abuse -It advocated for patriotism
- It advocated for nationalism -It fought against land grabbing
- It fought against Colour bar/ racial segregation
- It fought against forced cheap labour
- It fought against the kipande system
- It fought against over taxation

139. **Fill in to complete the table below correctly.**

Political unit	Political leader
District	_____
_____	L. C. III Chairperson
Parish	_____
_____	L. C. I Chairperson

- District .....LCV CHAIRPERSON
- Subcounty.....LCIII CHAIRPERSON
- Parish.....LCIII CHAIRPERSON
- Village.....LCI CHAIRPERSON



Asiimwe and Atang earn a monthly salary of 50,000 shillings and they make their monthly expenditure as follows.

<b><u>ASIIMWE'S EXPENDITURE</u></b>	
Medical	- shs. 20,000
Transport	-shs. 20,000
Fees	-shs. 20,000

<b><u>ATANG'S EXPENDITURE</u></b>	
Medical	- shs. 20,000
Transport	-shs. 10,000
Fees	-shs. 10,000
Savings	-shs. 10,000

140. **(a) Which type of budget does each make?**

- (i) **Asiimwe**                      Deficit budget/loss budget
- (ii) **Atang**                         Surplus budget/profit budget

**(b) Give a reason for each of your answer in (a) above.**

- (i) Asiimwe
  - Expenditure is greater than income
- (ii) Atang
  - Income is greater than expenditure

141. **(a) What are social activities?**

These are activities which bring people together during Joy or sorrow.

**(b) State two examples of social activities.**

- Burial                      -Circumcision                      -Funeral rites
- Marriage/introduction ceremonies                      -Graduation ceremonies
- Birthday celebration                      -Naming Children                      -Cleaning wells
- Constructing roads especially in villages
- Harvesting of some crops (millet, rice, maize, sorghum, tea, sugarcane)

**(c) Why are social activities important in society?**

- Promote peace                      -Promote security                      -Promote unity
- Promote friendship and cooperation                      -Promote hardworking
- Promote culture                      -Promote morals                      -Promote development

142. **(a) What is climate change?**

-These are variations of weather patterns for a long time.

**(b) State two causes of climate change.**


- Altitude                      -Ocean currents.                      -Vegetation of an area
- Distance from the Equator / Latitude
- Winds
- Relief

- Human activities like,  
Deforestation/ lumbering /Bush burning /Swamp drainage  
Industrialization/ fumes/Overgrazing /Mining  
Garbage/poor disposal of wastes/ Burning of wastes

**(c) Name the UN Agency that is responsible for controlling droughts in the world.**

- United Nations Environment Programme/UNEP

Use the diagram below to answer questions that follow.



**(a) Name the type of rainfall shown above.**

- Convectional rainfall

**(b) How does the sun help in the formation of the above rainfall?**

- Heats the water body which leads to evaporation.
- Heat from the sun leads to evaporation

**(c) Apart from transpiration, name any other two processes that take place in the above rain cycle.**

- Condensation                      -Transpiration                      -Heating from the sun
- Precipitation

143. **(a) Write IBEACO in full.**

- Imperial British East Africa Company

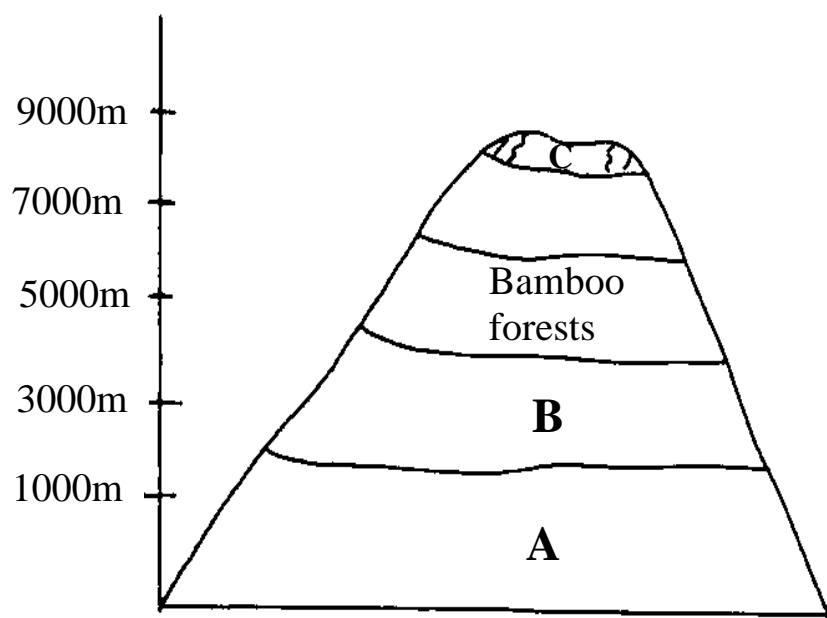
**(b) State two reasons for the formation of IBEACO.**

- To trade                      -To stop slave trade                      -To protect missionaries
- To establish colonial(British) rule

**(C) State the main reason for the withdrawal of IBEACO activities in East Africa.**

- It ran bankrupt/shortage of funds

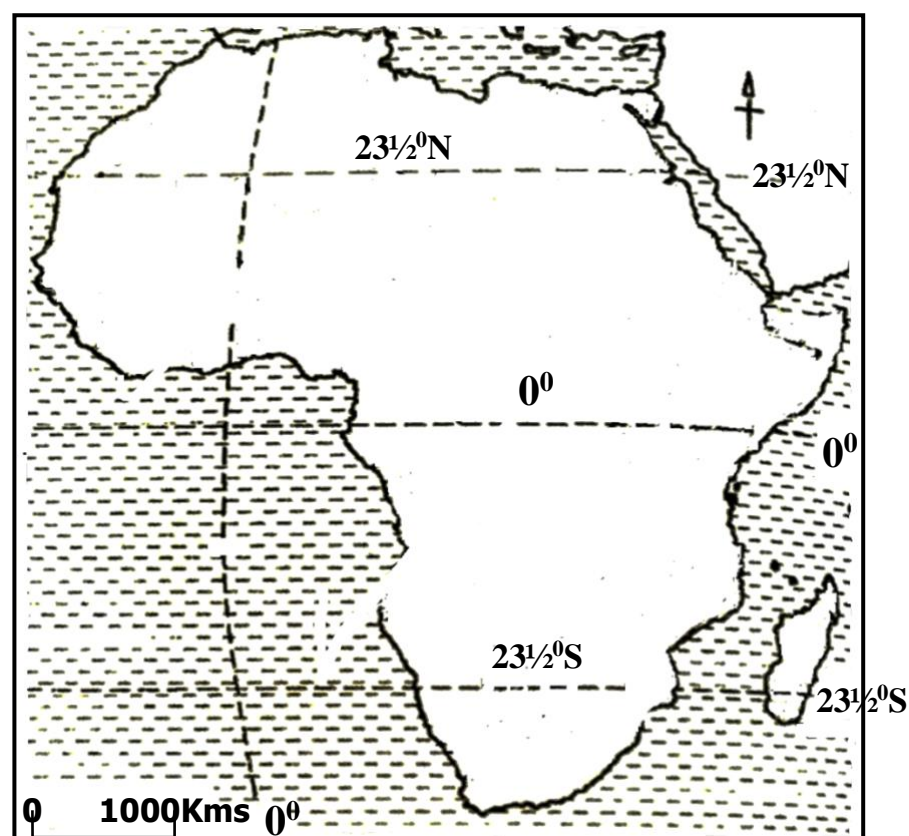
Use the diagram below to answer the questions that follow.



144. (a) **Why is tourism the main economic activity in A.**
- There is savannah grassland which favours the establishment of games parks.
- (b) **What type of wood is obtained from area B?**
- Hardwood
- (c) **Give a reason why vegetation changes in the diagram above.**
- Due to difference in altitude
- (d) **Why is there no vegetation growth in region C?**
- Due to presence of snow/ it is snowcapped
145. (a) **Identify the chief mineral mined in the following areas.**
- (i) **Wit-waters Rand in South Africa**
- Gold
- (ii) **Osukuru Hills in Tororo**
- Limestone
- (b) **Why is mining called an industry?**
- It is a source of income      -Source of government revenue
  - Develops infrastructures      -Source of employment
- (d) **Give one problem faced by the mining industry in African countries.**
- Poor government policies      -Civil wars/rebel activities
  - Poor transport Network      -Poor communication network
  - Shortage of skilled labour      -Shortage of capital
  - Scattered small mineral deposits      -Remoteness of some areas
  - Collapsing of mines      -Suffocation of miners
  - Shortage of capital      -Illegal mining
  - Low level of technology      -Flooding of mines

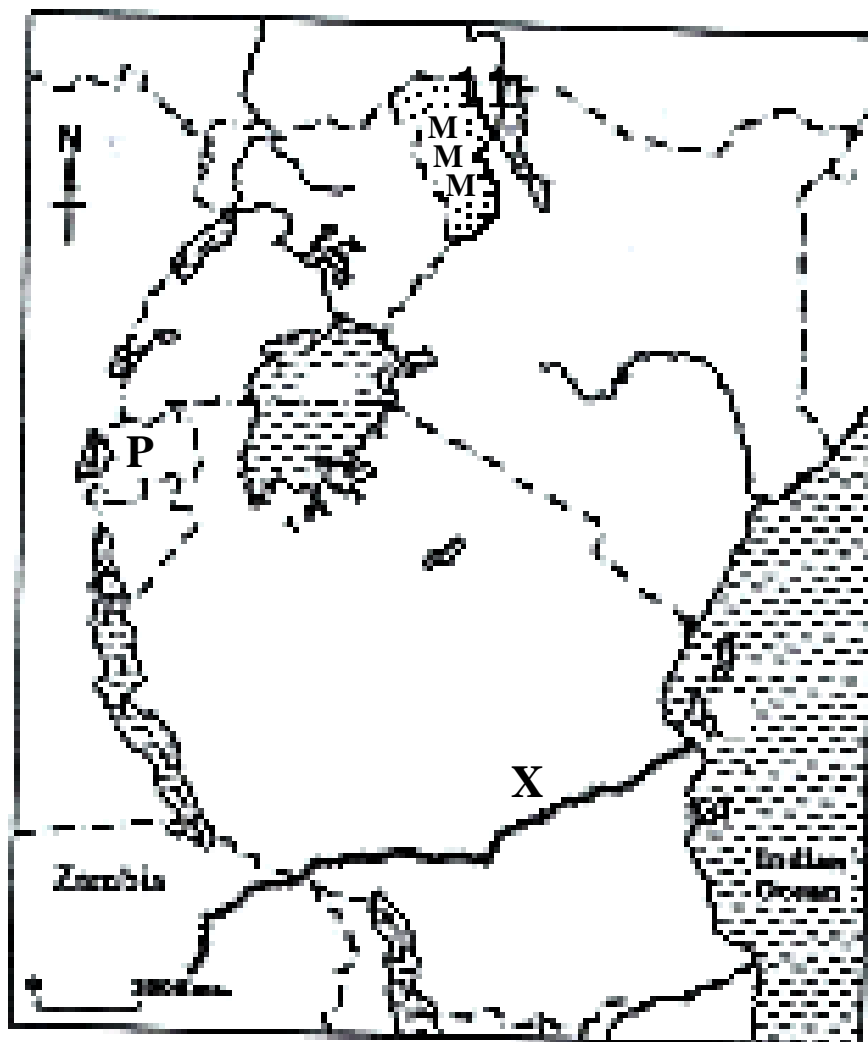
146. (a) **Write 'SOP' in full as was put in place by the Ministry of Health.**
- Standard Operating Procedures
- (b) **Give any two 'SOP' measures that were put in place by the Ministry of Health as strategy of reducing the spread of Corona Virus.**
- Putting on face masks                      -Washing hands with soap regularly
  - Sanitizing hands                              -Observing social distancing
  - Isolating suspected covid 19 cases/patients and contacts
  - Quarantining contacts and suspected cases
- (c) **How has COVID 19 disease affected the economic development of Uganda?**
- Has led to closure of schools which employ people
  - Has retarded investment                      -Has led to poverty
  - Has led to unemployment                      -Shortage of labour
  - Many hotels, bars and lodges are closed. -Has increased tax defaulting
  - Has retarded local and international tourism
  - Has led to retrenchment/curtailment/ reduction in number of workers in a companies                      -Has retarded international and local trade
  - Has led to loss / shortage of market for some goods
  - Has led to invention of covid 19 equipment/tools/ drugs to fight covid 19 disease.
  - New industries have emerged to produce COVID 19 equipment/tools and drugs
  - Has retarded international flights
  - Has increased government expenditure on COVID 19 vaccines , other equipment or tools and research

Study the map of Africa below and answer the questions that follow.



147. (a) **Name the latitude marked  $0^{\circ}$ .**
- Equator
- (b) **What name is given to the region between latitudes marked  $23\frac{1}{2}^{\circ}$  N and  $23\frac{1}{2}^{\circ}$  S?**
- The Tropics
  - Tropical region
- (C) **Name one African country crossed by the latitude marked,**
- (i)  **$23\frac{1}{2}^{\circ}$  North**
- Egypt      -Libya      -Algeria
  - Niger      -Mali      -Mauritania
- (ii)  **$0^{\circ}$**
- Somalia      -Kenya      -Uganda      - Gabon
  - Democratic Republic of Congo (DRC)
  - Republic of the Congo/Congo Brazzaville
  - Sao Tome and Principe

Study the map of East Africa below and use it to answer the questions that follow



148. (a) **Why is plantation farming difficult in country P on the map above?**
- Due to shortage of land
  - The area is mountainous/Has many hills or highlands
- (b) **Why was the railway line marked X built?**
- To connect Zambia to the coast of East Africa
  - To ease transportation of minerals (copper)

(c) **Why was the area marked MM transferred to Kenya during the evolution of boundaries?**

- To separate the Turkana from the Karimojong
- To control cattle rustling among the Turkana and the Karimojong

(d) **Apart from the railway marked X, name any other railway in East Africa.**

- Usambara railway/ Tanga-Korogwe railway
- Uganda-Kenya railway

149. **Match items in list A to the phrases in List B correctly.**

**List A**

- (i) Coffee
- (ii) Oil palm
- (iii) Cloves
- (iv) Pyrethrum

**List B**

- For making insecticides.
- For making perfumes.
- For making gun powder.
- For making candles.

- **Coffee** for making gun powder
- **Oil palm** for making candles
- **Cloves** for making perfume
- **Pyrethrum** for making insecticides

**RELIGIOUS EDUCATION.**

150. **EITHER:**

(a) **Why did Jesus have apostles?**

- To protect him                      -To help him to preach the gospel
- To give him company.
- To continue with his ministry in his absence

(b) **State two ways Jesus showed concern to people around Him.**

- He healed the sick      -He raised the dead      -He fed the hungry
- He forgave the sinners      -He healed the blind

(c) **Why was Jesus hated by the Jews?**

- He called himself the son of God
- He called himself a King of the Jews
- He promised to break the temple and build it in three days
- He broke the Sabbath
- He preached against their way of worship

**OR:**

### (a) Who were the Caliphs?

- These were successors of Prophet Muhammad.

**(b) Name any two Caliphs.**

- Caliph Abu Baker
  - Caliph Uthman
- Caliph Umar
  - Caliph Ali

**(c) State anyone way Prophet Muhammad showed concern to people around him.**

- He fed the hungry
  - He prayed for people
- He healed the sick
  - He provided water to the needy

**151. EITHER:**

**(a) Where does the Authority come from?**

- God                      -Satan                      -Bible                      -National constitution
- Marriage certificate/wedding rings      -Appointments/Tags/uniforms

**(b) State two types of Authority in Christianity.**

- Divine authority
  - Symbolic authority
- Apostolic authority
  - Marital authority
- Satanic authority
  - Civil authority

**(c) Which type of Authority is possessed by a head boy of your school?**

- Civil authority

**OR:**

**(a) Where does Authority come from?**

- God                      -Satan                      -Qur'an/Koran                      -National constitution
- Marriage certificate/wedding rings                      -Appointments/Tags/uniforms

**(b) State any two types of Authority in Islam.**

- Divine authority
  - Symbolic authority
- Apostolic authority
  - Marital authority
- Satanic authority
  - Civil authority

**(c) Which type of Authority is possessed by a head boy of your school?**

- Civil authority

**152. EITHER:**

**(a) State two ways Christians prepare for heaven.**

- By praying
  - By fasting
  - By preaching the gospel
- By Repenting
  - By forgiving Others
  - By reading the Bible
- By helping the needy
  - By appreciating others







**OR:**

**(a) Give two ways Allah communicates to His people.**

- Through vision      -Through prophets      -Through Angels
- Through the Qur'an      -Through dreams

**(b) Identify two ways Muslims communicate to Allah.**

- Through reading the Qur'an      -Through fasting
- Through praying

154. **FOR BOTH:**

**(a) Identify two religious organizations that have promoted the needs of Ugandans.**

- Watoto      -ADRA      -CCF      -YMCA
- YWCA      -Mothers Union      -The Scripture Union
- UJCC      -UMSC
- IRCU      -Back to the Bible Truth      -Islamic Relief Agency

**(b) Outline two ways religious organizations have promoted the needs of the Ugandans.**

- They have set up orphanages      -They have set up schools
- They have set up hospitals      -They have set up radio station
- They have built homes for some people      -They provide food to people
- They have set up Television stations      -They pray for the sick people
- They have advocated for human rights      -They promote reconciliation
- They have given financial assistance to people
- They preach against domestic violence      -They guide and counsel people
- They provide shelter to people      -They provide clothes to people

155. **EITHER:**

**(a) Who were the first two apostles called by Jesus?**

- Simon Peter      -Andrew

**(b) Outline two things that happened shortly after the death of Jesus Christ on the cross.**

- The curtain hanging in the Temple was torn in two from top to bottom.
- The earth shook
- The rocks split apart
- The graves broke open
- Many of God's people who had died were raised to life.

**OR:**

**(a) What is Hadith in Islam?**

- Are the sayings and actions of Prophet Muhammad.
- Are the sayings, actions and silent approvals of Prophet Muhammad.

**(b) Give one proper way of keeping the Qur'an.**

- Muslims ladies are forbidden from touching the Quran during menstruation      -Should not allow the Qur'an to touch the ground
- Should not leave the Qur'an open after reading
- Should not use the Qur'an as a pillow
- Should not take the Qur'an into impure places such as the bathroom.

**(c) State two reasons why Muslims read the Qur'an.**

- To come closer to Allah      -To get blessings
- To understand Allah's instructions      -To be forgiven their sins
- To go to paradise (Janna)

156. **EITHER:**

**(a) What is Success?**

- This is the achievement of a desired goal.

**(b) Mention two causes of Success in Christianity.**

- Hardworking      -Praying      -Fasting      -Reading the Bible
- Discipline      -Respect for others      -Friendship and cooperation
- Guidance and counseling      -Peace and security      -Mentorship
- Determination      -Education level      -Good family background

**(c) Identify one thing which makes a Christian fail in life.**

- Laziness      -Indiscipline      -Disobedience      -Disunity
- Poor family background      -Lack of education
- Lack of guidance and counseling      -Insecurity      -Poor mentorship
- Pride      -Lack of respect for God and others      -Unfaithfulness

**OR:**

**(a) What is Success in Islam?**

- This is the achievement of the desired goals

**(b) Outline two causes of Success in Islam.**

- Hardworking      -Praying      -Fasting      -Reading the Qur'an
- Discipline      -Respect for others      -Friendship and cooperation
- Guidance and counseling      -Peace and security      -Mentorship
- Determination      -Education level      -Good family background

**(c) Identify one thing which makes a Muslim fail in life.**

- Laziness                      -Indiscipline                      -Disobedience                      -Pride
- Poor family background                      -Lack of education                      -Insecurity
- Lack of guidance and counseling                      -Poor mentorship
- Lack of respect for Allah and others                      -Disunity                      -Unfaithfulness

157. **EITHER:**

**(a) What is Talent?**

- Is a natural ability to do something well.
- Is a God given gift.

**(b) State two ways talents can be improved.**

- Through guidance and counselling
- Through practice/ concentration
- Through prayers and fasting
- Through getting support from others

**(c) How do Christians use their talents to serve God?**

- By composing gospel
- By preaching the gospel/ word of God
- By dancing for God
- By guiding and counseling Others
- By helping the needy
- By reading the Bible
- By singing gospel
- By acting movies against evils

**OR:**

**(a) What is Talent in Islam?**

- Is a natural ability to do something well.
- Is a given gift from Allah

**(b) In which two ways can talents be improved in Islam?**

- Through guidance and counselling
- Through practice/ concentration                      -Through prayers and fasting
- Through getting support from others

**(c) How do Muslims use their talents to serve Allah?**

- By preaching Islam
- By guiding and counseling Others
- By helping the needy
- By reading the Qur'an

158. **EITHER:**

**(a) What is Holy Trinity?**

- Is the existence of God in three persons.

**(b) Name the three persons who make up the Holy Trinity.**

- God the Father
- God the Son
- God the Holy Spirit

**OR:**

**(a) What is Saum?**

- This is fasting in Islam.
- This is an act of abstaining from food, drinks , smoking and sexual activities during Ramadan.

**(b) Name any three groups of people exempted from fasting in Islam.**

- Travelers -Babies
- The sick -Women in menstrual cycle
- The elderly -The pregnant
- The breastfeeding mothers

159. **EITHER:**

"A virgin will become pregnant and have a son and he will be called Emmanuel"  
**Mathew: 123**

**(a) Who said the above words?**

- Angel Gabriel

**(b) To whom were the above words said?**

- Joseph

**(c) Why were the above words said?**

- Joseph wanted to break the engagement privately.
- Joseph was hesitating to take Mary.

**(d) What lesson do you learn from the above statement?**

- To believe in God -To respect God's message
- To respect God's messengers
- Never leave your partner -Be faithful
- We should not break our engagement

**OR:**

**"Read! Read! In the name of your Lord who created man in a clot of blood."**  
**Surat Alaq.**

**(a) Who said the above words?**

- Angel Gabriel/ Jibril

**(b) To whom were the above words said**

- Prophet Muhammad

**(c) Why were the above words said?**

- The prophet was hesitating to read
- Prophet Muhammad didn't know how to read.
- The prophet was on a retreat in the Caves of Hira

**(d) What lesson do you learn from the above statement?**

- To be obedient
- To trust Allah
- To read the Qur'an
- To respect Allah's messengers
- To be faithful
- To call on Allah during trouble
- To respect the quran
- To pray all time.

160. **EITHER:**

**(a) Name the mountain where the Ten Commandments were given to man.**

- Mount Sinai/Horeb

**(b) Who received the Ten Commandments from God?**

- Moses

**(c) Give any two importance of the Ten Commandments to man.**

- |                                    |                             |
|------------------------------------|-----------------------------|
| • Promote morals/respect           | -Promote love               |
| • Promote Friendship               | - Promote unity             |
| • Promote order in the society     | -Bring us closer to God     |
| • Help us to understand God's Will |                             |
| • It protect us from sinning       | -Promote peace and security |

**OR:**

- (a) Name the mountain where Prophet Muhammad received the first revelation.**
- Mount Noor / Nuru
- (b) Which angel brought the first revelation to Prophet Muhammad?**
- Angel Gabriel /Jibril
- (c) Give any two ways Muslims show obedience to Allah.**
- By fasting -By paying zakat
  - By making pilgrimage to Mecca
  - By sacrificing animals
  - By reading the Qur'an
  - By preaching Islam
  - By helping the needy
  - By praying five times a day

161. **EITHER:**

- (a) What is charity?**
- This is an activity or gift that benefits the public at large.
  - Is the giving of money, food or help (alms) to people in need.
- (b) Give any two acts of charity you know.**
- Donating clothes -Donating blood
  - Paying medical bills for sick people
  - Volunteering/ engaging in voluntary work
  - Fund raising -Sponsoring Children
  - Building orphanages -Helping street Children
  - Adopting street Children -Helping refugees
  - Donating money -Donating food
- (c) Why is it important to give charity?**
- Enables people to go to heaven
  - You get blessings
  - Your sins are forgiven
  - It promotes friendship
  - It promotes respect
  - It reduces on crimes rates
  - It reduces on suffering
  - It helps the poor
  - It brings us closer to God
  - It promotes unity
  - It encourages development

**OR:**

**(a) What is zakat?**

- Is giving alms.

**(b) Give any two items paid as zakat.**

- Food
- Clothes
- Money
- Minerals (gold)
- Animals

**(c) Give any one reason why a Muslims should give zakat**

- To go to paradise (Janna) -You get blessings
- Your sins are forgiven -It promotes friendship
- It promotes respect
- It reduces on crimes rates It reduces on suffering
- It helps the poor
- It brings us closer to Allah
- It promotes unity
- It encourages development

162. **EITHER:**

**"Where is the baby born to be the king of the Jews? We saw his star when it came up in the east, and we have come to worship him."**

**(a) Who said the above words?**

- The Magi/ The three Wise men

**(b) Who was being referred to as "the baby born to be the king"?**

- Jesus

**(c) Why did the visitors want to see the baby born to be the king?**

- To worship Him
- To give him gifts
- To prove the Angels message
- To see the new king of the Jews

**(d) Why was King Herod unhappy with the news of the baby born to be the king?**

- He feared the baby born to overthrow him/ take over his kingdom
- He thought that baby Jesus was to take over his kingdom.

**OR:**

**(a) What does the word Iman mean?**

- It means faith

**(b) Mention any two pillars of Iman.**

- Belief in Allah
- Belief in Angels
- Belief in the books of Allah(Holy books)
- Belief in Allah's prophets and that Muhammad is the last prophet
- Belief in the Day of Judgment
- Belief in the Qadhaa and Qadr (Doom and Divine Decree)

**(c) Give any one way Muslims show their Iman.**

- By fasting
- By praying five times a day
- By paying zakat
- By making pilgrimage to Mecca
- By believing in the book of Allah
- By believing in Angels
- By believing in Allah's messengers
- By going for congregation prayers every Friday

END